


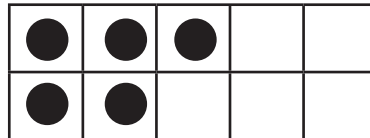
# ADDIEREN MIT DEN ZAHLEN BIS 10



SCHREIBE DIE FEHLENDE ZAHL IN DAS KÄSTCHEN UND MALE DIE FEHLENDEN KREISE IN DIE TABELLE.



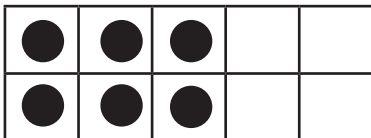
$$8 + \square = 10$$




$$5 + \square = 7$$



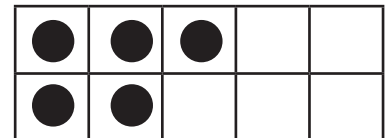
$$1 + \square = 9$$




$$6 + \square = 10$$



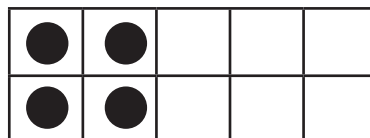
$$2 + \square = 4$$




$$5 + \square = 8$$



$$1 + \square = 7$$



$$4 + \square = 8$$



$$2 + \square = 9$$

RECHNE UND SCHREIBE DAS ERGEBNIS IN DAS KÄSTCHEN.

$$4 + 2 = \square$$

$$4 + \square = 7$$

$$\square + 5 = 10$$

$$8 + 1 = \square$$

$$2 + \square = 4$$

$$\square + 5 = 8$$

$$5 + 3 = \square$$

$$3 + \square = 3$$

$$\square + 1 = 10$$

$$1 + 6 = \square$$

$$6 + \square = 10$$

$$\square + 2 = 5$$

$$8 + 2 = \square$$

$$5 + \square = 9$$

$$\square + 5 = 9$$