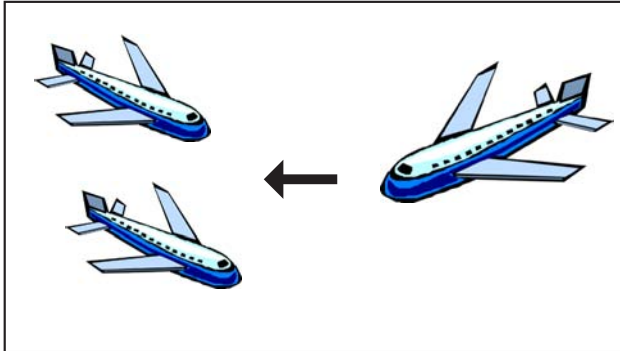
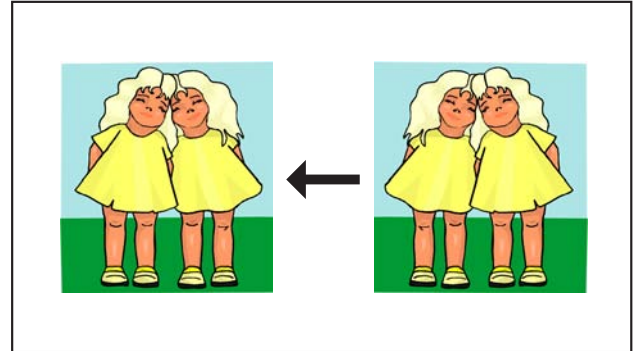


EINE RECHENGESCHICHTE

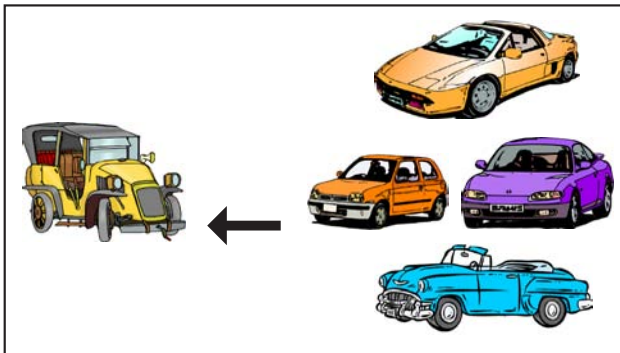
Erzähle die Rechengeschichten, indem du die richtigen Ziffern unter die Geschichten schreibst.



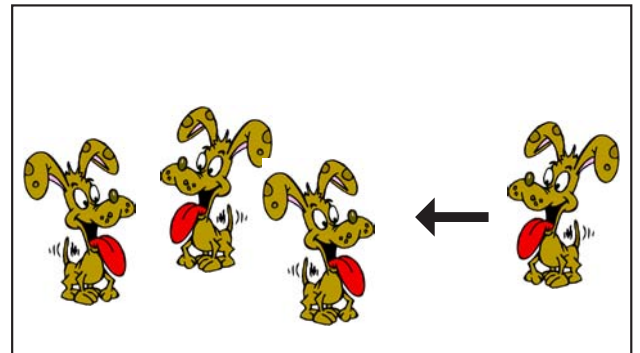
$$\boxed{2} + \boxed{1} = \boxed{3}$$




$$\boxed{2} + \boxed{2} = \boxed{4}$$



$$\boxed{1} + \boxed{4} = \boxed{5}$$



$$\boxed{3} + \boxed{1} = \boxed{4}$$



$$\boxed{1} + \boxed{1} = \boxed{2}$$

Jetzt ist es umgekehrt, versuche nun selbst eine Rechengeschichte zu malen.



$$\boxed{2} + \boxed{1} = \boxed{3}$$