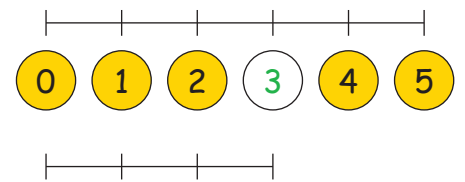
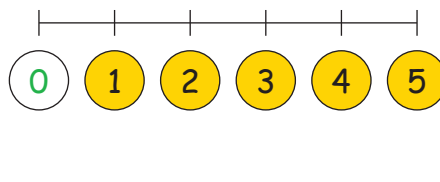
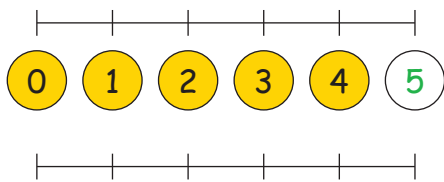
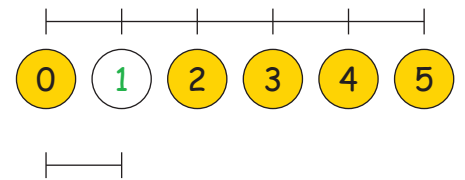
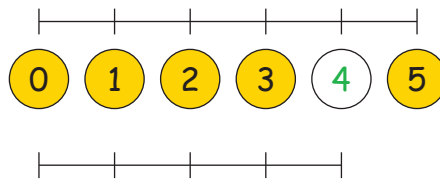
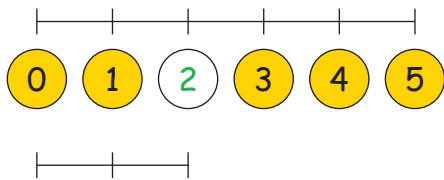


Zahlenstrahl bis 51. Die Zahlen bis 5:2. Schreibe die fehlenden Zahlen hin:

Nimm dein Lineal zur Hilfe.

3. Trage die Zahlennachbarn ein:

1	2	3
---	---	---

0	1	2
---	---	---

3	4	5
---	---	---

1	2	3
---	---	---

2	4	5
---	---	---

2	3	4
---	---	---

0	1	2
---	---	---

2	3	4
---	---	---

4. Löse folgende Rechnungen:

1	+	3	=	4
---	---	---	---	---

2	+	1	=	3
---	---	---	---	---

0	+	1	=	1
---	---	---	---	---

3	+	2	=	5
---	---	---	---	---

1	+	3	=	4
---	---	---	---	---

1	+	1	=	2
---	---	---	---	---

5	+	0	=	5
---	---	---	---	---

3	+	2	=	5
---	---	---	---	---

2	+	1	=	3
---	---	---	---	---

1	+	1	=	2
---	---	---	---	---

4	+	1	=	5
---	---	---	---	---

2	+	2	=	4
---	---	---	---	---

2	+	1	=	0
---	---	---	---	---

0	+	2	=	2
---	---	---	---	---

3	+	2	=	5
---	---	---	---	---