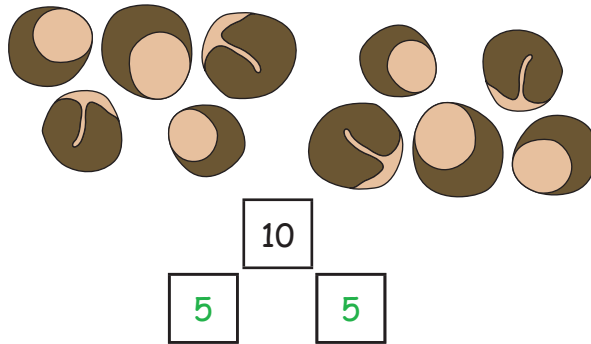


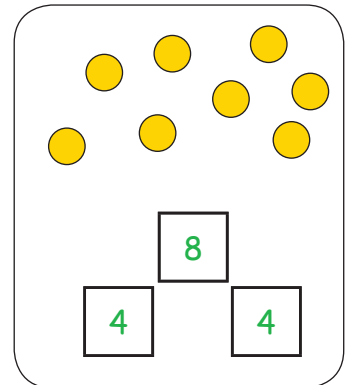
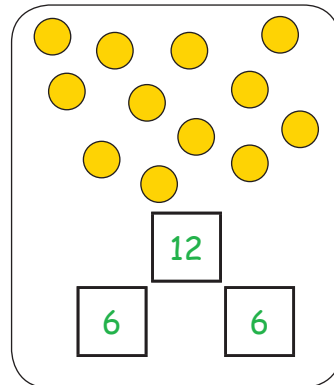
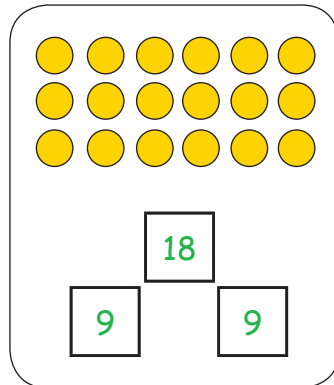
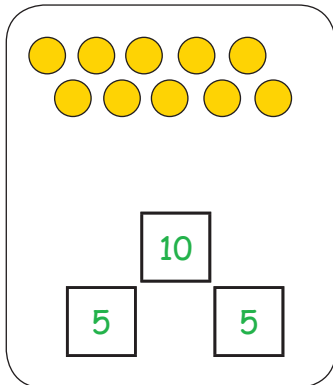
Zerlegen in 2 Hälften

1. Zwei Geschwister teilen:

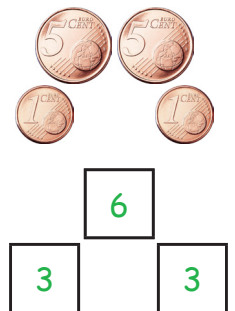
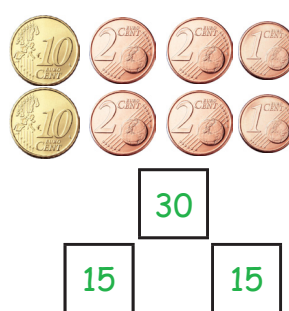
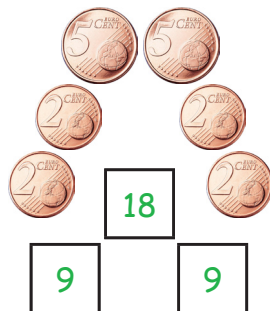

Claudia und Sebastian haben Kastanien gesammelt. Nun teilen sie diese auf. Jeder bekommt gleich viel.



2. Teile die Kreismengen in 2 gleich große Hälften:



3. Halbiere die Geldbeträge:



4. Rechne folgende Aufgaben im Kopf:

das Ganze:	6	10	22	16	4	6	10	14	18	12	20	30	28	8	24
die Hälfte:	3	5	11	8	2	3	5	7	9	6	10	15	14	4	12