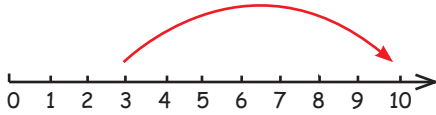
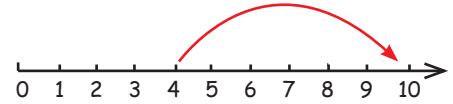


Calcule jusqu'à 10

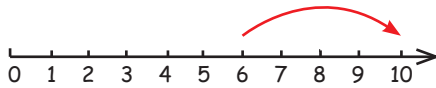

10



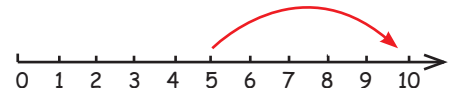
$$3 + \underline{\quad} = 10$$



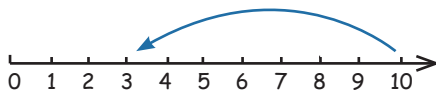
$$4 + \underline{\quad} = 10$$



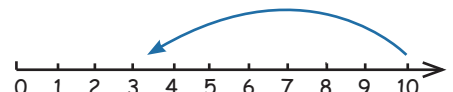
$$6 + \underline{\quad} = 10$$



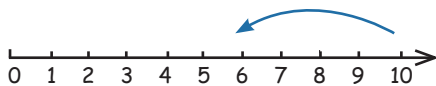
$$5 + \underline{\quad} = 10$$



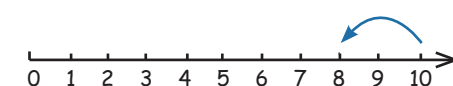
$$10 - \underline{\quad} = 2$$



$$10 - \underline{\quad} = 3$$



$$10 - \underline{\quad} = 6$$



$$10 - \underline{\quad} = 8$$