
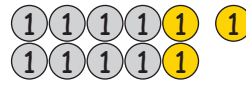


La dizaine inférieure1. Calcule les exemples en t'aidant de la monnaie.


$11 - 2 = \underline{\quad}$




$11 - 3 = \underline{\quad}$

$(11)^{-1} \rightarrow (10)^{-1} \rightarrow \bigcirc$

$(11)^{-1} \rightarrow (10)^{-2} \rightarrow \bigcirc$




$11 - 4 = \underline{\quad}$




$12 - 3 = \underline{\quad}$

$(11)^{-1} \rightarrow \bigcirc^{-3} \rightarrow \bigcirc$

$(12)^{-2} \rightarrow \bigcirc^{-1} \rightarrow \bigcirc$



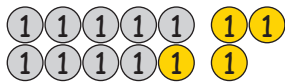
$12 - 4 = \underline{\quad}$




$12 - 5 = \underline{\quad}$

$(12)^{-2} \rightarrow \bigcirc^{-2} \rightarrow \bigcirc$

$(12)^{-2} \rightarrow \bigcirc^{-3} \rightarrow \bigcirc$




$13 - 4 = \underline{\quad}$




$13 - 5 = \underline{\quad}$

$(13)^{-3} \rightarrow \bigcirc^{-1} \rightarrow \bigcirc$

$(13)^{-3} \rightarrow \bigcirc^{-2} \rightarrow \bigcirc$




$13 - 6 = \underline{\quad}$



$14 - 5 = \underline{\quad}$

$(13)^{-3} \rightarrow \bigcirc^{-3} \rightarrow \bigcirc$

$(14)^{-4} \rightarrow \bigcirc^{-1} \rightarrow \bigcirc$



$14 - 6 = \underline{\quad}$



$14 - 7 = \underline{\quad}$

$(14)^{-4} \rightarrow \bigcirc^{-2} \rightarrow \bigcirc$

$(14)^{-4} \rightarrow \bigcirc^{-3} \rightarrow \bigcirc$



$15 - 6 = \underline{\quad}$




$15 - 7 = \underline{\quad}$

$(15)^{-5} \rightarrow \bigcirc^{-1} \rightarrow \bigcirc$

$(15)^{-5} \rightarrow \bigcirc^{-2} \rightarrow \bigcirc$



$15 - 8 = \underline{\quad}$




$16 - 7 = \underline{\quad}$

$(15)^{-5} \rightarrow \bigcirc^{-3} \rightarrow \bigcirc$

$(16)^{-6} \rightarrow \bigcirc^{-1} \rightarrow \bigcirc$



$16 - 8 = \underline{\quad}$



$16 - 9 = \underline{\quad}$

$(16)^{-6} \rightarrow \bigcirc^{-2} \rightarrow \bigcirc$

$(16)^{-6} \rightarrow \bigcirc^{-3} \rightarrow \bigcirc$