
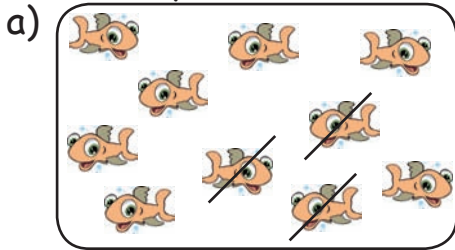


de 10 à 0

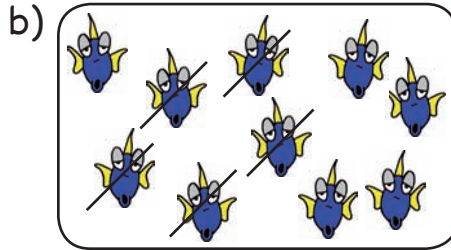


1.

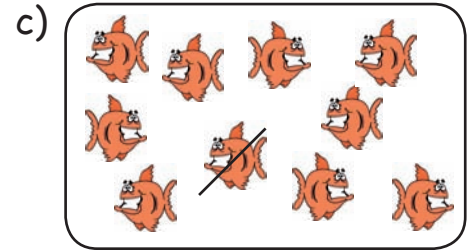
Exemple :



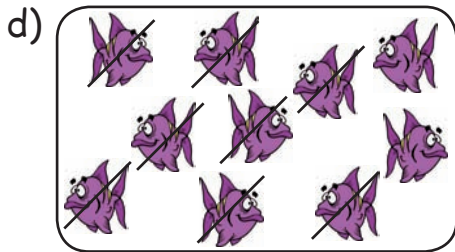
$$10 - 3 = 7$$



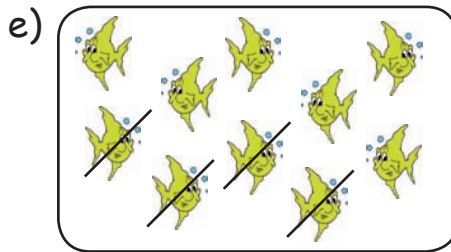
$$10 - 5 = 5$$



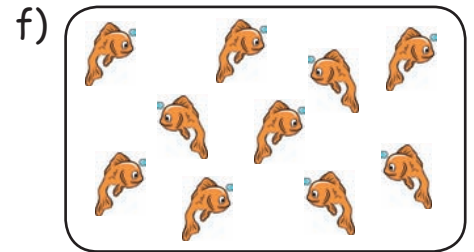
$$10 - 1 = 9$$



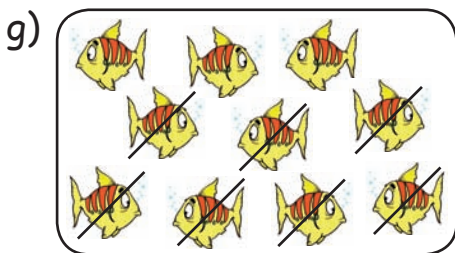
$$10 - 8 = 2$$



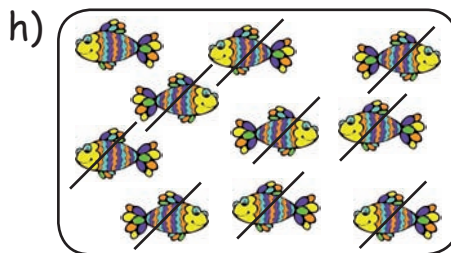
$$10 - 4 = 6$$



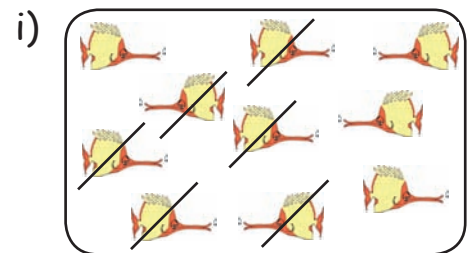
$$10 - 0 = 10$$



$$10 - 7 = 3$$



$$10 - 9 = 1$$



$$10 - 6 = 4$$

2. Complète les cases avec les chiffres manquants.

- |                 |                |                |                |
|-----------------|----------------|----------------|----------------|
| a) $6 = 8 - 2$  | e) $7 = 9 - 2$ | i) $5 = 8 - 3$ | m) $5 = 7 - 2$ |
| b) $4 = 6 - 2$  | f) $5 = 6 - 1$ | j) $4 = 9 - 5$ | n) $2 = 9 - 7$ |
| c) $1 = 5 - 4$  | g) $6 = 9 - 3$ | k) $0 = 1 - 1$ | o) $1 = 2 - 1$ |
| d) $9 = 10 - 1$ | h) $3 = 7 - 4$ | l) $6 = 6 - 0$ | p) $3 = 6 - 3$ |