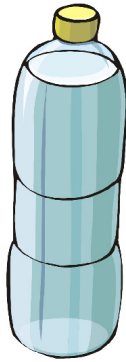


Plus ou moins que 1 litre

1. Plus ou moins que 1 litre ?



moins




plus



moins



plus



plus



moins



plus




moins



plus






moins



plus

2. Entoure les éléments ayant tout juste 1 litre. Vérifie après !



3. Mesure la contenance d'objets de ton choix !